

Rotating Dice

Mentally rotate the image of a three-dimensional object in space




How to proceed:

Examine each pair of dice in the figure below. There are 3 pairs of dice.

Do you think, according to the indication of the dice dots, that the first pair can be turned into the position of the second one?

Choose your option (if any) and place a check next to the pair.

You have 2 minutes to solve this task.



FROM: McKim, R. H. (1980) Thinking Visually. A Strategy Manual for Problem Solving. Dale Seymour Publications

SOLUTION: IF YOU CHECKED THE SECOND PAIR OF DICE, YOU CORRECTLY PERFORMED THE OPERATION OF ROTATION.